



Maha Bodhi School  
2025 End-of-Year Examination  
Primary 3  
Mathematics  
Booklet A

Name : \_\_\_\_\_ (       )

Class : Primary 3 \_\_\_\_\_

Date : 24 October 2025

Total Duration for Booklets A and B: 1 h 30 min

---

**INSTRUCTIONS TO CANDIDATES:**

1. Do not turn over this page until you are told to do so.
2. Follow all instructions carefully.
3. Answer all questions.
4. Shade your answers in the Optical Answer Sheet (OAS) provided.

This booklet consists of 5 printed pages.

**Section A ( 14 marks )**

Questions 1 to 6 carry 1 mark each.

Questions 7 to 10 carry 2 marks each.

For each question, four options are given. One of them is the correct answer.

Make your choice (1, 2, 3 or 4) and shade your answer on the Optical Answer Sheet.

1. In 7482, the digit 8 is in the \_\_\_\_\_ place.

- (1) ones
- (2) tens
- (3) hundreds
- (4) thousands

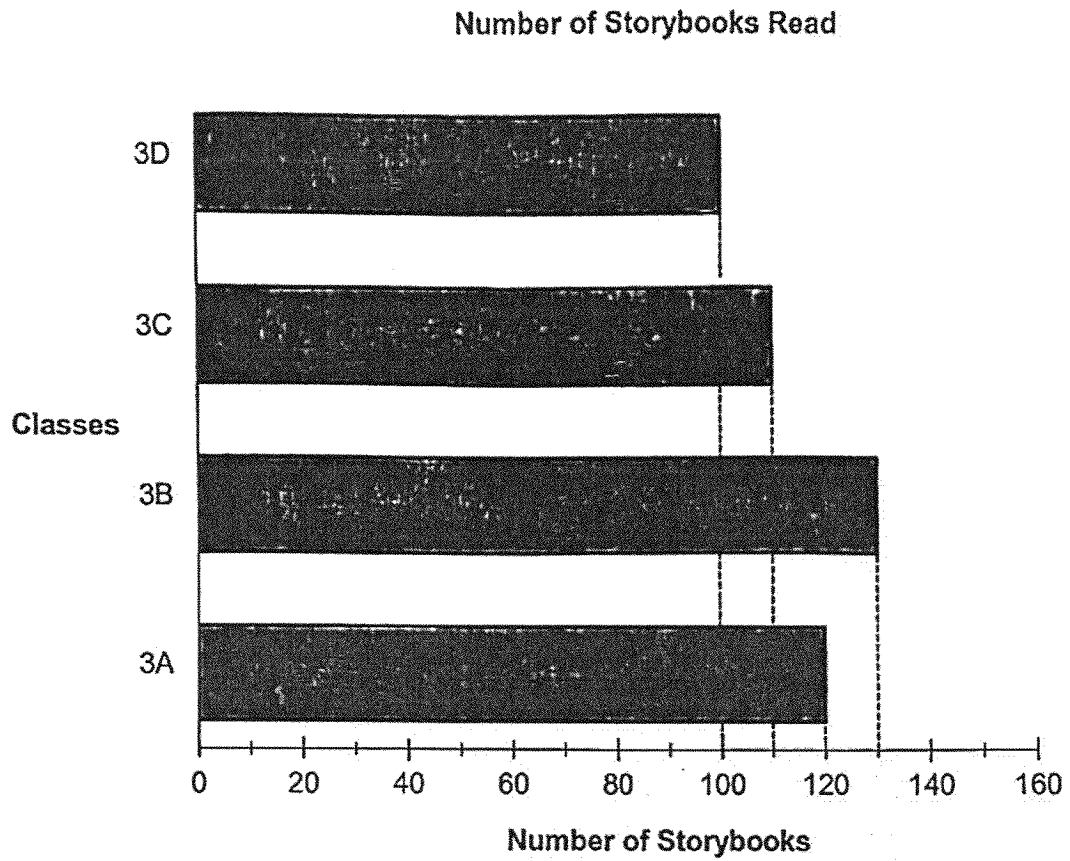
2.  $3498 + 617 =$  \_\_\_\_\_

- (1) 3005
- (2) 4015
- (3) 4115
- (4) 4215

3. Find the product of 274 and 6.

- (1) 1644
- (2) 1624
- (3) 1244
- (4) 1224

4. The bar graph shows the number of storybooks read by students in Primary 3 classes in a week.



How many storybooks did the students in Class 3C read?

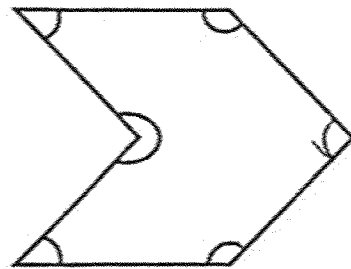
- (1) 100
- (2) 110
- (3) 120
- (4) 130

5. What is the missing number in the box?

$$\frac{2}{5} = \frac{\square}{10}$$

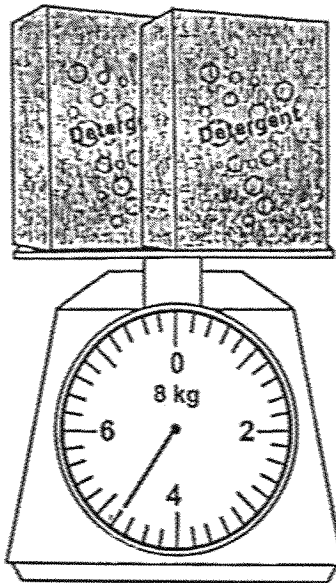
- (1) 7
- (2) 5
- (3) 3
- (4) 4

6. In the figure, how many of the marked angle(s) is/are right angles?



- (1) 1
- (2) 2
- (3) 3
- (4) 6

7. Find the mass of the 2 boxes of detergent.



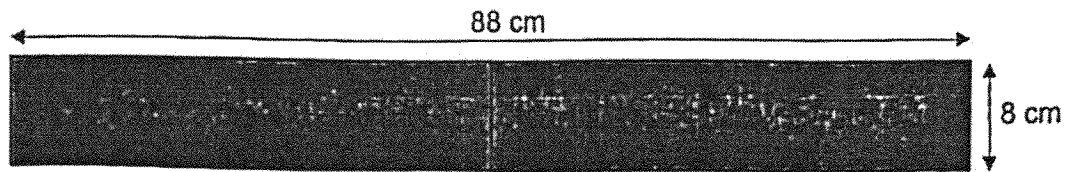
- (1) 4 kg 40 g
- (2) 4 kg 80 g
- (3) 4 kg 400 g
- (4) 4 kg 800 g

8. Arrange these fractions from the greatest to the smallest.

$\frac{5}{9}$	$\frac{2}{3}$	$\frac{1}{7}$
---------------	---------------	---------------

- |     | <u>greatest</u> |               | <u>smallest</u> |
|-----|-----------------|---------------|-----------------|
| (1) | $\frac{1}{7}$   | $\frac{5}{9}$ | $\frac{2}{3}$   |
| (2) | $\frac{2}{3}$   | $\frac{1}{7}$ | $\frac{5}{9}$   |
| (3) | $\frac{5}{9}$   | $\frac{2}{3}$ | $\frac{1}{7}$   |
| (4) | $\frac{2}{3}$   | $\frac{5}{9}$ | $\frac{1}{7}$   |

9. Two similar rectangles are placed side by side. Find the area of one rectangle.



- (1) 704 cm<sup>2</sup>  
(2) 352 cm<sup>2</sup>  
(3) 192 cm<sup>2</sup>  
(4) 104 cm<sup>2</sup>
10. Ethan had 40 more game cards than Lucas at first.  
Lucas then gave 10 of his game cards to Ethan.  
How many more game cards did Ethan have than Lucas in the end?

- (1) 50  
(2) 20  
(3) 30  
(4) 60



Maha Bodhi School  
2025 End-of-Year Examination  
Primary 3  
Mathematics  
Booklet B

Name : \_\_\_\_\_ (       )

Class : Primary 3 \_\_\_\_\_

Date : 24 October 2025

Total Duration for Booklets A and B: 1 h 30 min

---

**INSTRUCTIONS TO CANDIDATES:**

1. Do not turn over this page until you are told to do so.
2. Follow all instructions carefully.
3. Answer all questions.
4. Write your answers in this booklet.

Booklet	Marks Obtained	Max Marks
A		14
B		36
<b>Total</b>		<b>50</b>

Parent's signature: \_\_\_\_\_

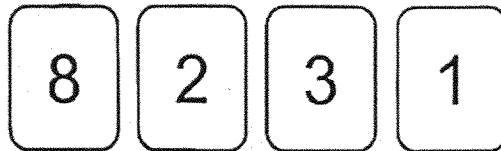
Section B (20 marks)

Questions 11 to 20 carry 2 marks each.

Show your working clearly and write your answers in the spaces provided.

For questions which require units, give your answers in the units stated.

11. What is the smallest 4-digit even number that can be formed using all the digits given below?




Ans: \_\_\_\_\_

12. Study the pattern. What is the missing number?



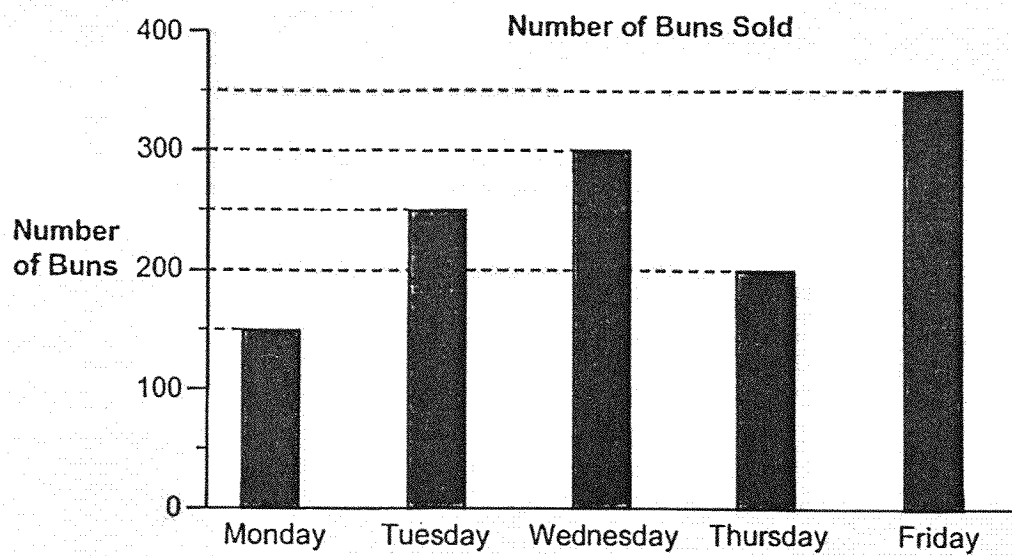
Ans: \_\_\_\_\_



13. Find the value of  $108 \div 4$

Ans: \_\_\_\_\_

14. The bar graph shows the number of buns sold by a bakery for 5 days.




How many buns were sold from Monday to Wednesday?

Ans: \_\_\_\_\_

14

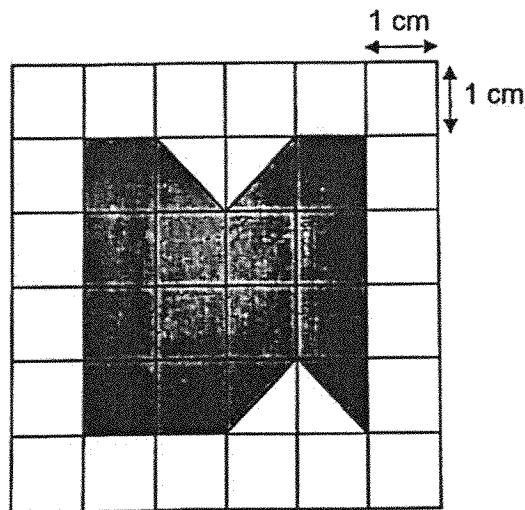
B-2

15. The clock shows the time Jayden reached the park in the afternoon. What time did he reach the park? Write the time in 24-hour clock.



Ans: \_\_\_\_\_

16. The figure is made up of 1-cm squares. Find the area of the figure.

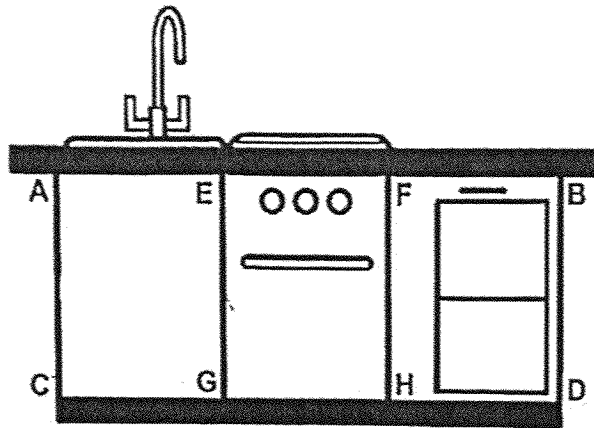


Ans: \_\_\_\_\_ cm<sup>2</sup>

14

B-3

17. Look at the picture of a kitchen sink cabinet.



(a) Name a pair of perpendicular lines.

Ans: \_\_\_\_\_ ⊥ \_\_\_\_\_

(b) Name a pair of parallel lines.

Ans: \_\_\_\_\_ // \_\_\_\_\_

18. Ali and Tom shared a rectangular cake. Ali ate  $\frac{1}{12}$  of the cake and Tom ate  $\frac{1}{6}$  of it.  
 What fraction of the cake did they eat altogether?  
 Express the answer in its simplest form.

Ans: \_\_\_\_\_

/ 4
-----

19. Andres collected 3 times as many marbles as Beevi.  
They collected 140 marbles altogether.  
How many marbles did Beevi collect?

Ans: \_\_\_\_\_

20. Samantha spent 2 h 20 min reading a book.  
She checked her watch when she stopped reading and it was 2.05 pm.  
Her watch was 10 minutes faster than the actual time.  
What was the actual time she started reading?

Ans: \_\_\_\_\_

**Section C ( 16 marks )**

Questions 21 to 24 carry 3 marks each.

Question 25 carries 4 marks.

Show your working clearly in the space provided for each question and write your answers in the spaces provided. For questions which require units, give your answers in the units stated. The number of marks available is shown in brackets [ ] at the end of each question or part-question.

---

21. Siti received \$36.40 from her father and \$23.80 from her mother.  
She bought a pair of shoes and had \$18.20 left.  
How much did she pay for the pair of shoes?



Ans: \_\_\_\_\_ [3]

13
----

22. 260 pupils were divided equally into groups of 4.  
2 pupils from each group were chosen as group leaders.  
How many group leaders were there altogether?

Ans: \_\_\_\_\_ [3]

13
----

B-7

23. Pupils in the Science Club collected 344 bottles for a recycling project. After packing some bottles equally into 8 bags, 16 bottles were left. How many bottles were there in each bag?

Ans: \_\_\_\_\_ [3]

13

B-8

24. Mrs Wong used some flour to bake cookies and muffins.  
She used 1200 g to bake the muffins.  
She used 560 g less flour to bake the cookies than muffins.  
How much flour did she use altogether?

Ans: \_\_\_\_\_ [3]

/3
----

25. Amella had 325 marbles. 179 marbles were red and the rest were blue.

(a) How many blue marbles did Amella have?

Ans: (a) \_\_\_\_\_ [2]

(b) Amelia's mother gave her 208 more red marbles.  
How many red marbles did Amelia have in the end?

Ans: (b) \_\_\_\_\_ [2]



*Remember to check your work!  
End of Paper*

14

[www.sgexam.com](http://www.sgexam.com)

**SCHOOL : MAHA BODHI PRIMARY SCHOOL**  
**LEVEL : PRIMARY 3**  
**SUBJECT : MATHEMATICS**  
**TERM : 2025 END OF YEAR EXAMINATION**

Q1	Q2	Q3	Q4	Q5	Q6	Q7	Q8	Q9	Q10
2	3	1	2	4	1	4	4	2	4

Q11	1238
Q12	3465
Q13	$108 \div 4 = 27$
Q14	$150 + 250 + 300 = 700$
Q15	14:35
Q16	12 squares + 4 triangles = 14
Q17	a) AC – CG b) BD – FH
Q18	$\frac{1}{12} + \frac{1}{6} = \frac{1}{12} + \frac{2}{12} = \frac{3}{12} = \frac{1}{4}$
Q19	$140 \div 4 = 35$
Q20	2h 20m before 2.05pm = 11.45am 10m before 11.45am = 11.35am
Q21	$\$36.40 + \$23.80 = \$60.20$ $\$60.20 - \$18.20 = \$42.00$
Q22	$260 \div 4 = 65$ $65 \times 2 = 130$
Q23	$(344 - 16) \div 8 = 328 \div 8 = 41$
Q24	$1200 + (1200 - 560) = 1200 + 640 = 1840$
Q25	a) $325 - 179 = 146$ b) $179 + 208 = 387$

[www.sgexam.com](http://www.sgexam.com)