


Name: _____ ()

Class: Primary 3 _____

CHIJ ST NICHOLAS GIRLS' SCHOOL (PRIMARY)



Primary 3 Mathematics

2025 End-Year Assessment

24 October 2025

Marks:	50
--------	----

Parent's/Guardian's Signature

Total Time : 1 hour 30 minutes

INSTRUCTIONS TO CANDIDATES

Do not turn over this page until you are told to do so.
Follow all instructions carefully.
Answer all questions.
Write your answers in this booklet.

This booklet consists of 20 printed pages.

Section A

Questions 1 to 4 carry 1 mark each. Questions 5 to 7 carry 2 marks each. For each question, four options are given. One of them is the correct answer. Make your choice (1, 2, 3 or 4). Write your answers in the brackets provided. (10 marks)

1. What is the missing number in the box?

$$2000 + 40 + 1 = \boxed{\quad ? \quad}$$

- (1) 241
- (2) 2041
- (3) 2401
- (4) 2410

()

2. Which one of the following statements is true?


- (1) $\frac{1}{4} < \frac{1}{7}$
- (2) $\frac{2}{5} < \frac{6}{10}$
- (3) $\frac{5}{8} > \frac{3}{4}$
- (4) $\frac{6}{9} > \frac{2}{3}$

()


MARKS:

3. Which of the following shows an obtuse angle?


(1)




(2)



(3)



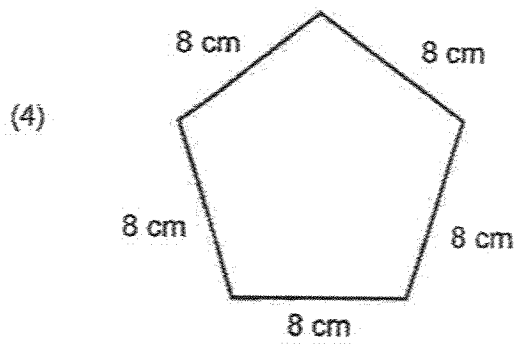
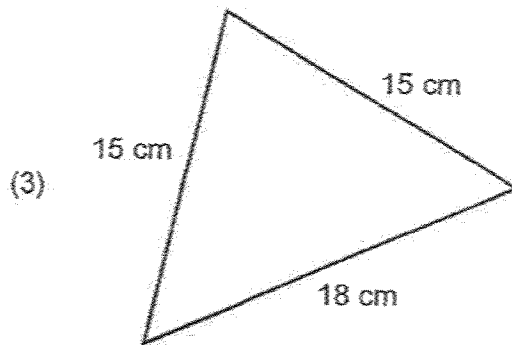
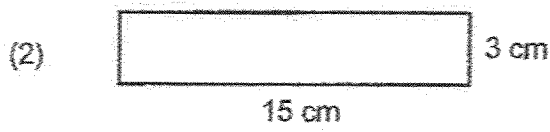
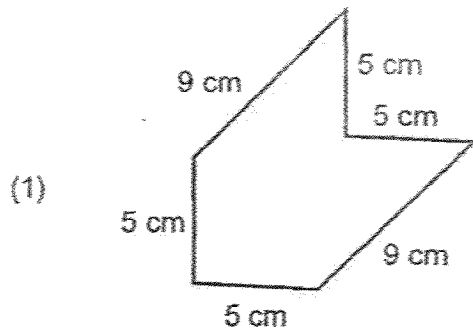
(4)



()

MARKS:

4. Look at the figures below. Which figure has the greatest perimeter?



()

MARKS:

5. There are 53 Art Club members. Mr Bala gave 6 sheets of drawing paper to each of the Art Club members. He had 9 sheets of drawing paper left. How many sheets of drawing papers did Mr Bala have at first?

- (1) 318
- (2) 327
- (3) 477
- (4) 483

()

6. Find the value of $\frac{1}{2} - \frac{4}{12}$. Express the answer in its simplest form.

- (1) $\frac{1}{4}$
- (2) $\frac{1}{6}$
- (3) $\frac{3}{10}$
- (4) $\frac{5}{14}$

()

--

7. Siew Mei went to the supermarket. She was there for 1 h 50 min. She left the supermarket at 4:00 pm. What time did she reach the supermarket?

- (1) 2:10 pm
- (2) 2:30 pm
- (3) 2:50 pm
- (4) 3:50 pm

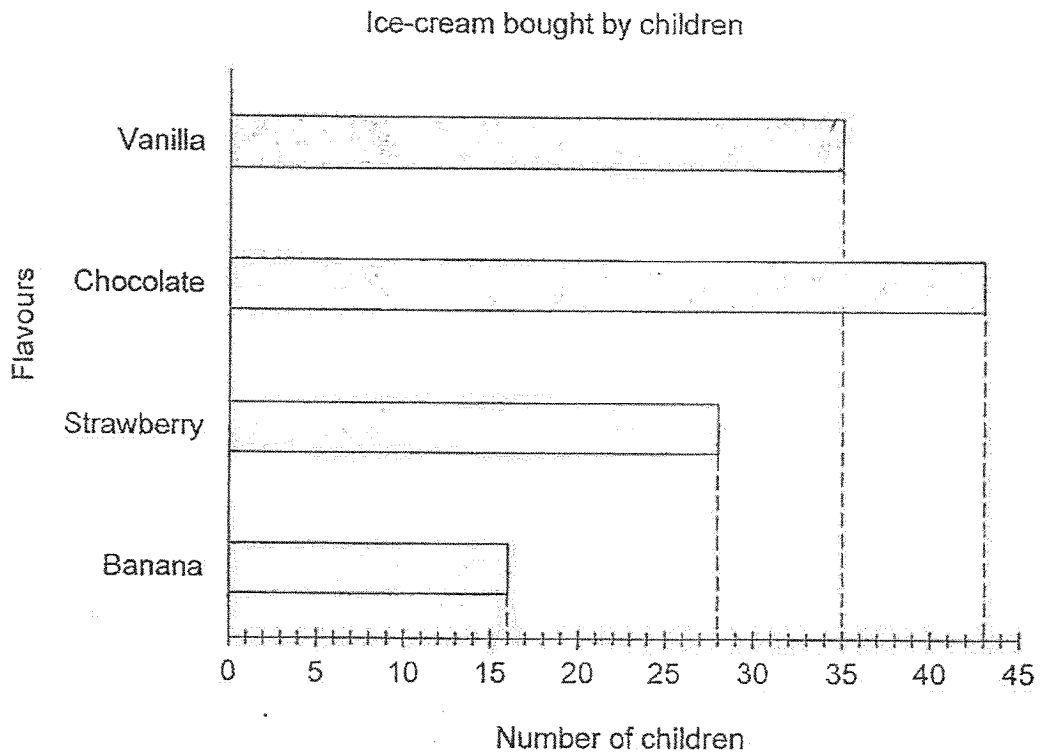
()

Section B

Questions 8 to 11 carry 1 mark each. Questions 12 to 19 carry 2 marks each. Show your working clearly and write your answers in the spaces provided. For questions which require units, give your answers in the units stated. (20 marks)

Do not write in this space

8. The bar graph shows the number of children who bought different flavours of ice-cream.



How many more children bought vanilla ice-cream than strawberry ice-cream?

Ans: _____

MARKS:

9. What is the missing number in the box?

1352 , 1382 , , 1442 , 1472 , 1502

Do not
write in
this
space

Ans: _____

10. Fill in the blanks with "more" or "less".

(a) 6×5 is 5 _____ than 7×5 .

Ans: (a) _____

(b) 9×9 is 9 _____ than 8×9 .

Ans: (b) _____

MARKS:

11. Find the sum of \$7.65 and \$99.55.

Do not
write in
this
space

Ans: \$ _____

12. Jia Jia bought a wallet for \$84. She gave the cashier 2 pieces of \$50 notes.
The cashier gave her the change in \$2 notes. How many \$2 notes did
Jia Jia receive?

Ans: _____

MARKS:

13. (a) Measure Line XY shown below.

Do not
write in
this
space



Ans: (a) _____ cm

(b) The table shows the volume of water in each container.

Which container has the same amount of water as Container F?

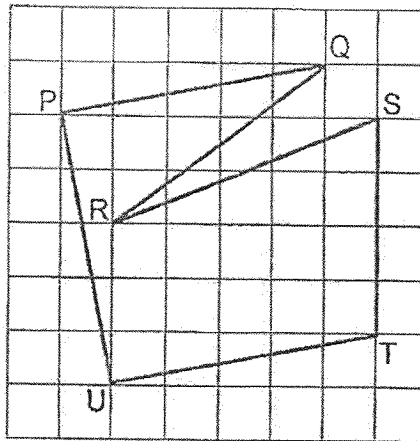
Container	Volume of water
F	3 l 2 ml
G	3200 ml
H	3 l 20 ml
J	3002 ml

Ans: (b) Container _____

MARKS:

14. In the figure, which two lines are parallel to each other?

Do not write in this space



Ans: _____ and _____

15. The table shows the timings for the animal shows at a zoo theatre.

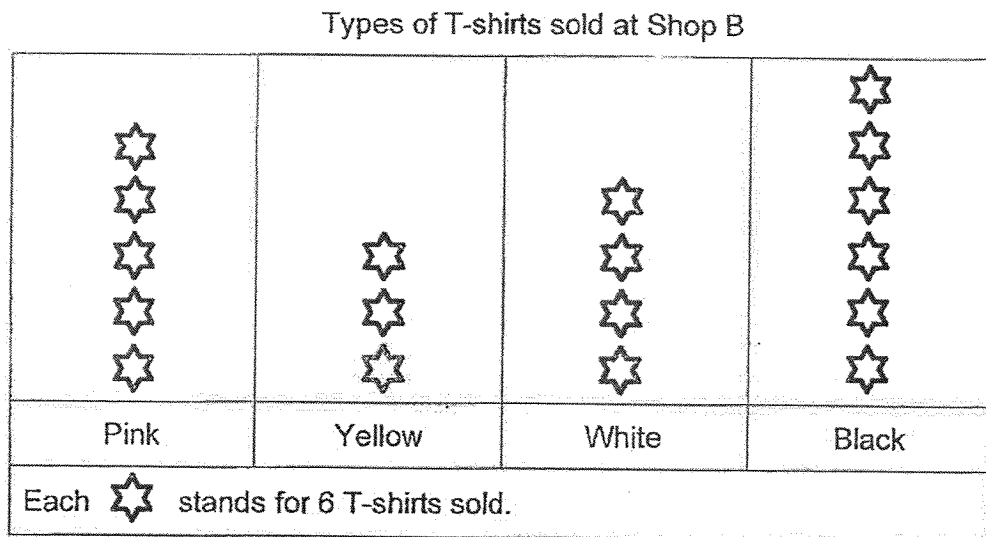
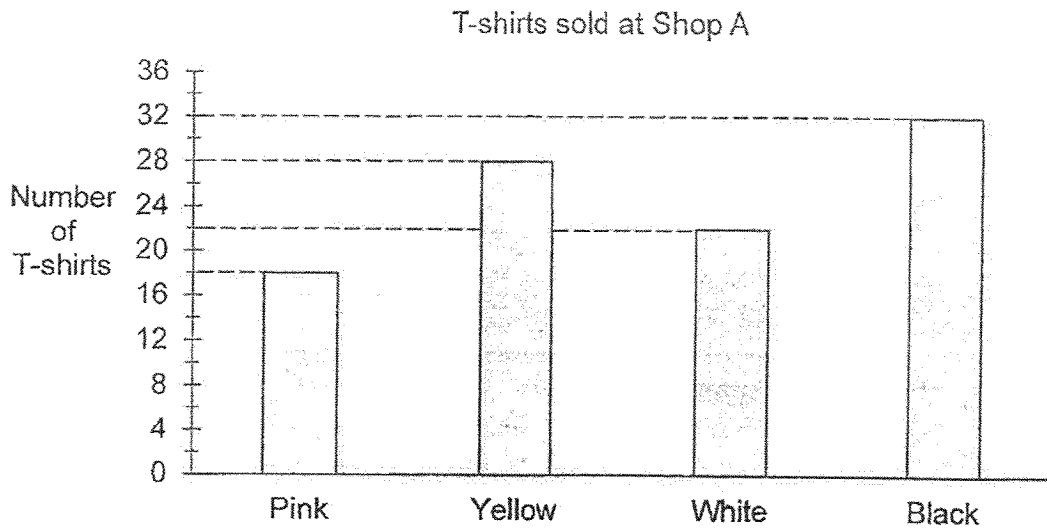
	Show Time
First Show	10 45
Second Show	12 15

Mr Lee and his family wanted to watch the second show. They arrived at the zoo theatre 25 minutes after the first show started. How long did Mr Lee and his family wait for the second show to start?

Ans: _____ h _____ min

16. The graphs show the number of T-shirts sold at two different shops. Study the two types of graphs.

Do not write in this space



- (a) Which shop sold fewer white T-shirts?

Ans: (a) Shop _____

- (b) Find the total number of black T-shirts sold in Shop A and Shop B.

Ans: (b) _____


17. Arrange the fractions from the greatest to the smallest.

$$\frac{1}{2}, \frac{5}{6}, \frac{4}{9}$$

Do not write in this space

Ans: _____
greatest

18. Mrs Davi hung 12 identical shapes in a straight line. All the shapes were at an equal distance of 2 m apart from each other. What was the distance between the 1st and 12th shape?

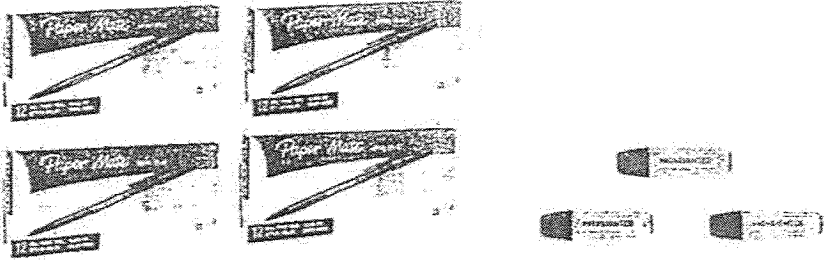


Ans: _____ m

19. A shop was giving 3 free highlighters for every 4 boxes of pens bought. Zen bought some boxes of pens and received 12 free highlighters. What was the least number of boxes of pens Zen bought?

Do not write in this space

Special Offer!



Buy 4 boxes of pens, get 3 free highlighters.

Ans: _____

Section C

For questions 20 to 25, show your working clearly and write your answers in the spaces provided. The number of marks available is shown in brackets [] at the end of each question or part-question. (20 marks)

Do not write in this space

20. Box A has a mass of 3 kg. It is 390 g lighter than Box B. Box C is 620 g heavier than Box B. What is the mass of Box C? Leave your answer in kilograms and grams.

Ans: _____ [3]

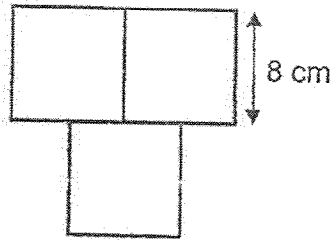
21. John had \$156. He wanted to buy a soccer ball which cost \$79 and a jacket that cost \$150. How much more money would John need to save in order to buy these two items?

Do not write in this space

Ans: _____ [3]

22. The figure below is made up of 3 identical squares. The length of the square is 8 cm.

Do not write in this space



(a) What is the area of one square?

Ans: (a) _____ [1]

(b) What is the area of the figure?

Ans: (b) _____ [2]

23. Xiao Ming bought 7 boxes of fruit tarts for a party. Each box contained 24 fruit tarts. Then she unpacked all the fruit tarts and placed them equally on 4 trays.

Do not write in this space

(a) How many fruit tarts did Xiao Ming buy?

Ans: (a) _____ [1]

(b) How many fruit tarts were on each tray?

Ans: (b) _____ [2]

24. In the hall, there were 465 grey chairs and some blue chairs at first. Another 45 grey chairs were added. In the end, there were 5 times as many grey chairs as blue chairs.

Do not
write in
this
space

(a) How many blue chairs were there?

Ans: (a) _____ [2]

(b) How many chairs were there altogether in the hall at first?

Ans: (b) _____ [2]

25. Beth, Katie and Pamela had some cards. Beth had 69 fewer cards than Katie. Beth and Katie had a total of 277 cards. Pamela had as many cards as Beth.

Do not write in this space

(a) How many cards did Pamela have?

Ans: (a) _____ [2]

(b) Pamela gave 41 cards to Katie. How many more cards did Katie have than Pamela in the end?

Ans: (b) _____ [2]

End of Paper

SCHOOL : CHIJ ST NICHOLAS GIRLS' SCHOOL
LEVEL : PRIMARY 3
SUBJECT : MATHEMATICS
TERM : 2025 END OF YEAR EXAMINATION

Q1	Q2	Q3	Q4	Q5	Q6	Q7			
2	2	4	3	2	2	1			

Q8	$35 - 28 = 7$
Q9	$1382 + 30 = 1412$
Q10	a) less b) more
Q11	$99.55 + 7.65 = \$107.20$
Q12	$50 \times 2 = 100$ $100 - 84 = 16$ $16 \div 2 = 8$
Q13	a) 6 cm b) Container F = 3002 ml Ans: Container J
Q14	PQ and UT
Q15	10:45 (25 min) \rightarrow 11:10 (1 h) \rightarrow 12:10 (5 min) \rightarrow 12:15 Ans: 1 h 5 min
Q16	a) $22 < 24$ Ans: Shop A b) $32 + 36 = 68$
Q17	$\frac{5}{6}, \frac{1}{2}, \frac{4}{9}$
Q18	$12 - 1 = 11$ $11 \times 2 = 22 \text{ m}$
Q19	$12 \div 3 = 4$ $4 \times 4 = 16$
Q20	$3 \text{ kg} = 3000 \text{ g}$ $3000 + 390 = 3390$ $3390 + 620 = 4010$ $= 4000 + 10$ $= 4 \text{ kg } 10 \text{ g}$

Q21	$79 + 150 = 229$ $229 - 156 = \$73$
Q22	a) $8 \times 8 = 64 \text{ cm}^2$ b) $64 \times 3 = 192 \text{ cm}^2$
Q23	a) $24 \times 7 = 168$ b) $168 \div 4 = 42$
Q24	a) $5u = 465 + 45 = 510$ $1u = 102$ b) $465 + 102 = 567$
Q25	a) $277 - 69 = 208$ $208 \div 2 = 104$ b) $41 \times 2 = 82$ $82 + 69 = 151$

www.sgexam.com