



HENRY PARK PRIMARY SCHOOL
2025 Non-Weighted Term Review 1
MATHEMATICS
PRIMARY 3

Name: _____ (

Class: P3. _____

Date: _____

Duration: 40 minutes

Parent's Signature: _____

Section A: Multiple Choice Questions

For each question, four options are given. One of them is the correct answer.
Make your choice (1, 2, 3 or 4) and shade your answer in the Optical Answer Sheet.


1. In 701, the value of the digit 0 is _____

- (1) 1
- (2) 10
- (3) 100
- (4) 0

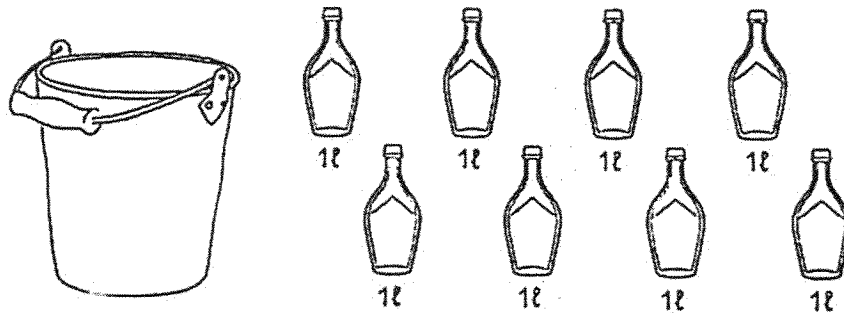
2. The difference between 903 and 314 is _____.

- (1) 589
- (2) 599
- (3) 611
- (4) 1217

3. Which of the following represents all the stars in the picture shown below?



- (1) $6 + 3$
(2) $6 - 3$
(3) 6×3
(4) $6 + 3$
4. Dorothy pours all the water from the pail into bottles of the same size as shown in the picture below.



What is the total volume of water in the pail?

- (1) 6 ℓ
(2) 8 ℓ
(3) 10 ℓ
(4) 4 ℓ

5. 2 h 14 min = _____ min

- (1) 74 min
- (2) 114 min
- (3) 134 min
- (4) 214 min

Section B: Short Answer Questions

Write your answers in the spaces provided.

6. (a) Write 5946 in words.

(b) Find the sum of 2086 and 4288.

Ans: (b) _____

7. (a) $3189 = 3000 + \underline{\quad ? \quad} + 80 + 9$
What is the missing number?

Ans: (a) _____

- (b) In 9723, which digit is in the thousands place?

Ans: (b) _____

8. (a) What is 10 more than 3490?

Ans: (a) _____

- (b) Arrange the numbers in order. Begin with the smallest.

7028 2800 7820 8270

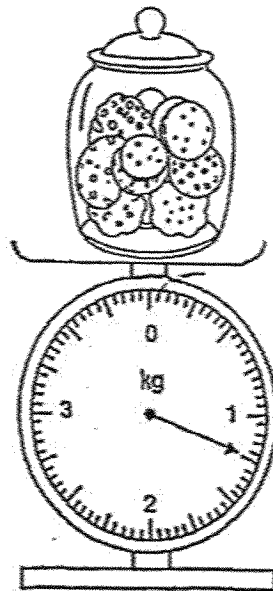
Ans: (b) _____, _____, _____, _____

9. Arrange the following fractions in order. Begin with the greatest.

$$\frac{1}{10} \quad \frac{1}{5} \quad \frac{1}{7} \quad \frac{1}{3}$$

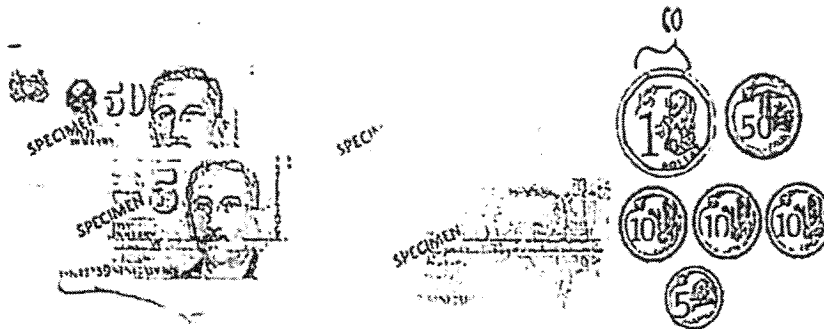
Ans: _____
greatest _____ smallest

10. The diagram below shows the mass of 1 jar of cookies. What is the mass of 2 such jars of cookies?



Ans: _____ kg _____ g

11. Peter bought a camera. He paid the exact amount using the money shown in the diagram below. How much did the camera cost?



Ans: \$ _____

12. Which of the following numbers is an even number that is greater than 2700 but smaller than 4700?



Ans: _____

13. Study the number pattern. Find the missing numbers.

625, 1625, 1725, , 2825, 3825, 3925, 4925, , 6025

(a)

Ans: (a) _____

Ans: (b) _____

Section C: Problem Sums

For questions 14 to 16, show your working clearly and write your word statements to indicate your final answer.

14. Mdm Owen had 17 stickers at first. Then, she bought 19 more stickers. She packed all her stickers equally into 4 packets. How many stickers were there in each packet?

Ans: _____

15. On Friday, Mrs Baker baked 280 cupcakes. On Saturday, she baked 50 fewer cupcakes than on Friday. What is the total number of cupcakes she baked on Friday and Saturday?

Ans: _____

16. At an arcade game, Kevin scored 2378 points. Andy scored 1251 more points than him. Andy scored 755 fewer points than Bernard. What was Bernard's score?

Ans: _____

End of Paper

www.sgexam.com

SCHOOL : HENRY PARK PRIMARY SCHOOL
LEVEL : PRIMARY 3
SUBJECT : MATHEMATICS
TERM : 2025 WEIGHTED ASSESSMENT 1

Q1	Q2	Q3	Q4	Q5					
4	1	3	2	3					

Q6	a) Five thousand nine hundred and forty six b) 6374
Q7	a) 100 b) 9
Q8	a) $3490 + 10 = 3500$ b) 2800, 7028, 7820, 8270
Q9	$\frac{1}{3}, \frac{1}{5}, \frac{1}{7}, \frac{1}{10}$
Q10	$1250 \times 2 = 2500 = 2\text{kg } 500\text{gm}$
Q11	$50 + 5 + 2 + 2 + 1 + 0.5 + 0.1 + 0.1 + 0.1 + 0.05 = \60.85
Q12	3378
Q13	a) 2725 b) 5025
Q14	$17 + 19 = 36$ $36 \div 4 = 9$
Q15	Friday 280 Sat $280 - 50 = 230$ Total $280 + 230 = 510$
Q16	Kevin 2378 Andy $2378 + 1251 = 3629$ Bernard $3629 + 755 = 4384$

www.sgexam.com