



2025 PRIMARY 3 WEIGHTED ASSESSMENT 1

Name: _____ ()

Date: 13 May 2025

Class: Primary 3 ()

Duration: 45 minutes

Parent's Signature: _____


Marks: _____ / **20**

MATHEMATICS

INSTRUCTIONS TO CANDIDATES


1. Write your name, class and register number.
2. Do not turn this page over until you are told to do so.
3. Follow all instructions carefully.
4. Answer all questions.
5. Use a dark blue or black ballpoint pen to write your answers in the space provided for each question.
6. Do not use correction fluid/tape.
7. Do not use highlighters on any part of your answers.

4.




Item A

\$48.90



Item B

\$90.80



Item C

\$89.40


Which item is the most expensive?

Ans: Item B

5. $5396 = 5000 + \boxed{}$ tens + 90 + 6

Ans: 39


6. Count and write the total amount of money.



Ans: 200

7. The clock below shows the time when Mrs Lee started preparing lunch.

What time did she start preparing lunch?



Ans: _____ a.m.

8. How many minutes are there in 2h 20 min?


Ans: _____ min

9. Aini packed a total of 56 apples into some bags.
There were 7 apples in each bag.
How many bags were there?


Ans: _____

10. Jim and Priya spent \$42.40 on lunch together. Jim ordered Pasta.


Which item did Priya order?




Burger
\$19.50



Pasta
\$16.90



Pizza
\$25.50



Fish and Chips
\$22.10

Ans. _____

Questions 11 to 15 carry 2 marks each. Show your workings clearly and write your answers in the spaces provided. For questions which require units, give your answers in the units stated. (10 marks)

- 11 Miss Chan spent \$98.90 on a pair of shoes.
She spent \$43.70 on a dress.
How much more did she spend on the pair of shoes than on the dress?

She spent _____

Ans: _____

12. Rishi watched a movie from 2.50 p.m. to 4.25 p.m.
How long was the movie in hours and minutes?

The movie was _____ long.

Ans: _____

- 13 Tom made 1374 ham sandwiches.
He made 235 more ham sandwiches than tuna sandwiches.
How many sandwiches did he make altogether

He made _____

Ans: _____

14. Ali, Bala and Caili collected some cards.
Ali collected 3 cards. Bala collected 6 times as many cards as Ali.
Cai Li collected 5 fewer cards than Bala.
How many cards did they collect altogether?

They collected _____

Ans: _____

15. Lee Ying is 6 years younger than Malik.
How old will Malik be when the sum of their age is 54 years,

Malik will be _____

Ans: _____

End of Paper

SCHOOL : TAO NAN PRIMARY SCHOOL
LEVEL : PRIMARY 3
SUBJECT : MATHEMATICS
TERM : 2025 WEIGHTED ASSESSMENT 1

Q1	Nine thousand and forty eight
Q2	3045, 3405, 3450, 3504
Q3	937
Q4	Item B
Q5	30
Q6	$\$150 + \$40 + \$15 + \$0.90 = \$205.90$
Q7	11am
Q8	$60 \times 2 + 20 = 140$
Q9	$56 \div 7 = 8$
Q10	$\$42.40 - \$16.90 = \$25.50$ (Pizza)
Q11	$\$98.90 - \$43.70 = \$55.20$
Q12	1h 35mins
Q13	$1374 \times 2 - 235 = 2513$
Q14	Ali – 3 Bala – $3 \times 6 = 18$ Cai li – $18 - 5 = 13$ Total – $3 + 18 + 13 = 34$
Q15	$54 - 6 = 48$ $48 \div 2 = 24$

www.sgexam.com