

Ai Tong School
P3 Mathematics
2025 Term 2 Review

Name: _____ ()

Class: 3 _____

Date: _____

Marks: _____ /30

Duration: 50 minutes

Parent's Signature: _____

Section A


Questions 1 to 4 carry 1 mark each. Questions 5 to 12 carry 2 marks each. Show your working clearly in the space provided for each question and write your answers in the spaces provided. For questions which require units, give your answers in the units stated. (20 marks)

1 Find the value of 102×4 .

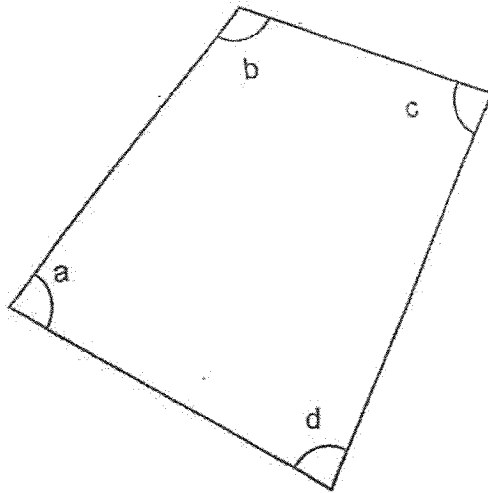
Ans: _____

2 What is $96 \div 6$?

Ans: _____



3 In the figure below, which angle is an obtuse angle?

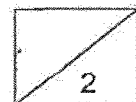


Ans: _____

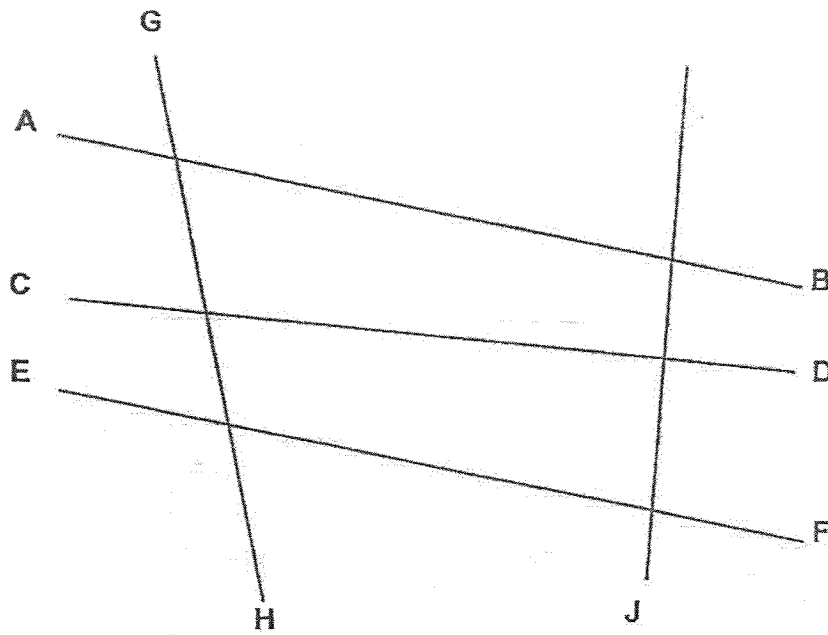
4 Which of the letters has a pair of perpendicular lines?

A L K O Z

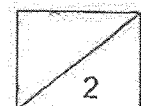
Ans: _____



5 Study the diagram below. Name a pair of parallel lines.

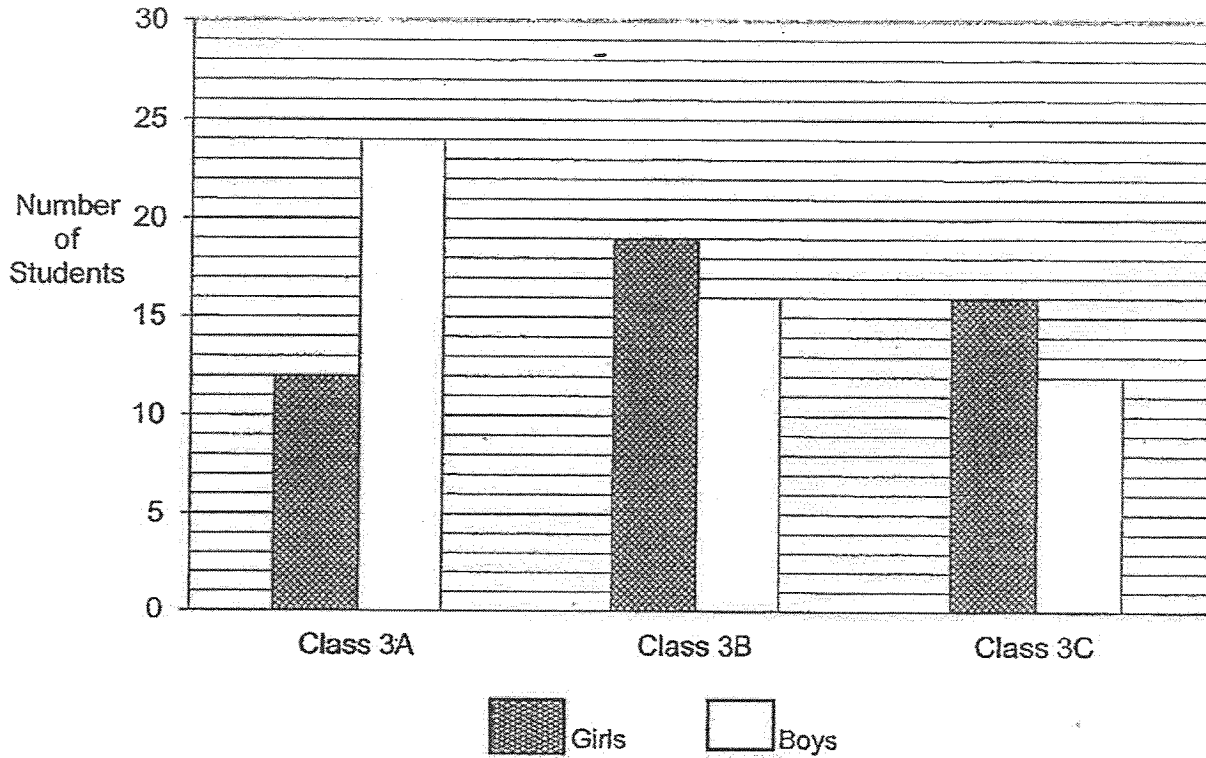


Ans: //



Use the information below to answer Questions 6(a) and 6(b).

6 The graph below shows the number of students in Classes 3A, 3B and 3C.

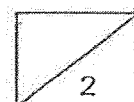


(a) Which class has more boys than girls?

Ans: _____

(b) How many girls are there in Class 3C?

Ans: _____



- 7 48 pens were packed into 8 equal boxes.
How many pens were there in each box?

Ans: _____

- 8 What is the product of 9 and 205?

Ans: _____

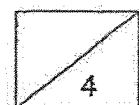


- 9 Henry collected 125 coins.
He collected 5 times as many coins as Gina.
How many coins did Gina collect?

Ans: _____

- 10 When a number is divided by 3, the quotient is 46 and the remainder is 2.
What is the number?


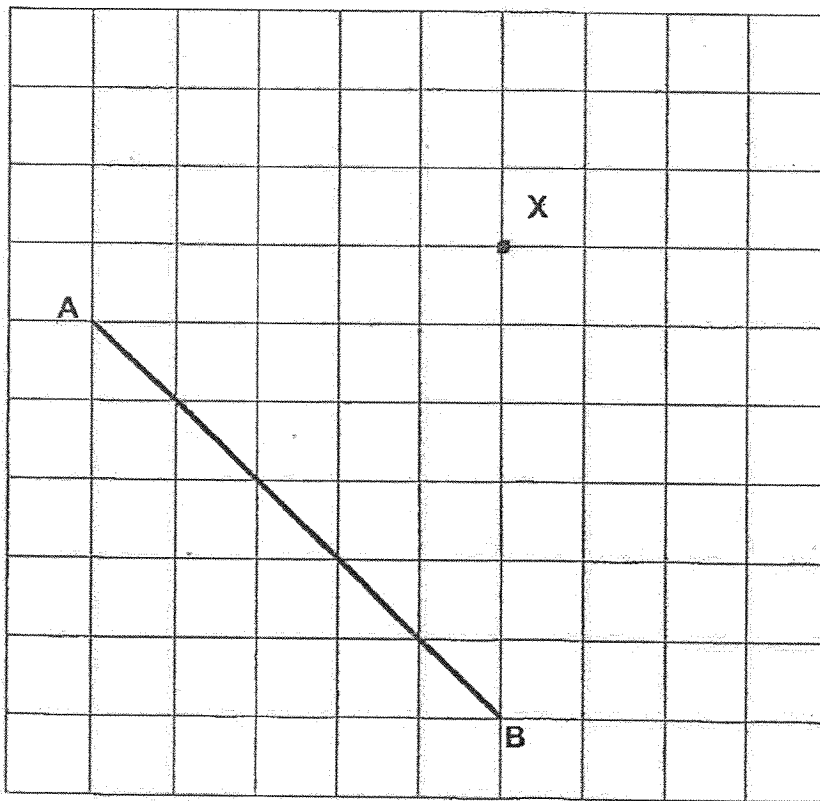
Ans: _____



- 11 Ahmad bought 1263 yellow beads.
He bought 200 more red beads than yellow beads.
How many beads did he buy altogether?

Ans: _____

- 12 Draw a line perpendicular to AB that passes through Point X.

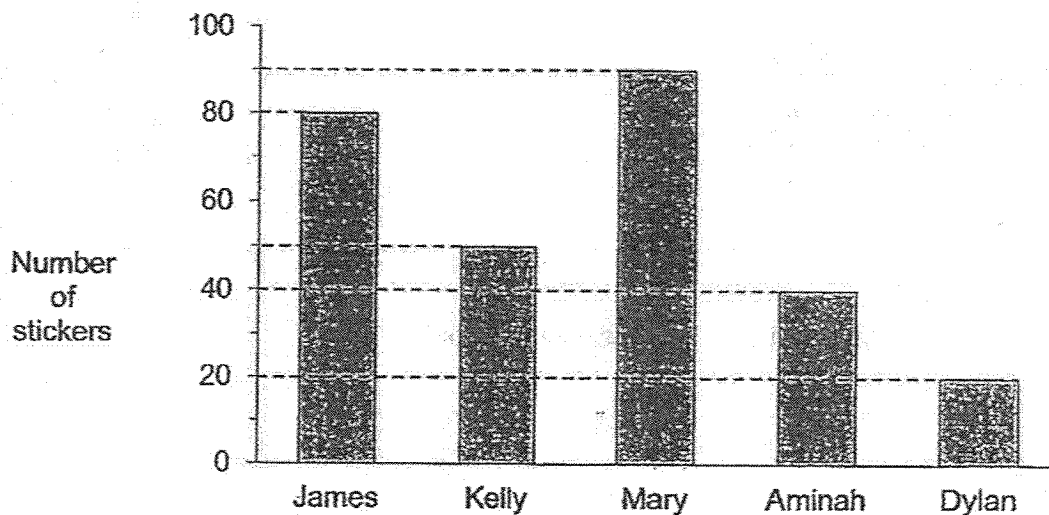


Section B

For questions 13 to 15, show your working clearly in the space provided for each question and write the answers in the spaces provided. The number of marks available is shown in the brackets [] at the end of each question or part-question. (11 marks)

Use the information below to answer Questions 13(a) and 13(b).

13. The graph below shows the number of stickers 5 children collected.



(a) Who collected twice as many stickers as Aminah?

Ans: _____ [1]

(b) How many stickers must Kelly collect so that she has the same number of stickers as Mary?

Ans: _____ [2]



14 Mrs Lim bought 2 identical watches and 3 identical necklaces.

Each watch cost \$51.

2 watches cost as much as 3 necklaces.

(a) How much did Mrs Lim pay for the 2 watches?


Ans:(a) \$ _____ [1]

(b) What was the cost of 1 necklace?

Ans:(b) \$ _____ [2]



- 15 A bakery is having a sale. For every 3 muffins a customer buys, he will get another muffin free.



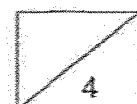
- (a) Li Min has \$5.
How many muffins can Li Min get with all her money?

Ans:(a) _____ [1]

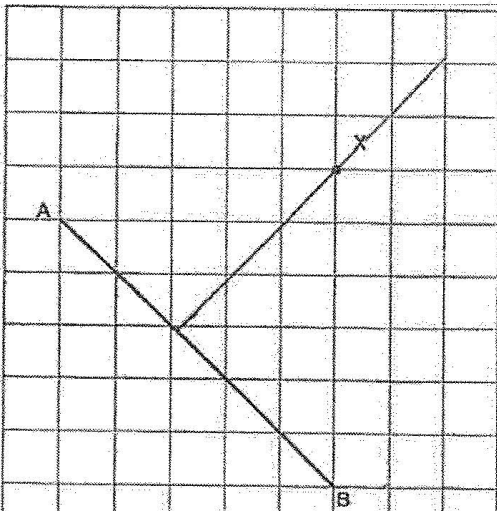
- (b) David wants to get 24 muffins for a party.
How much must David pay to get 24 muffins?

Ans:(b) \$ _____ [3]

End of Paper
— CHECK YOUR WORK CAREFULLY —



SCHOOL : AI TONG PRIMARY SCHOOL
LEVEL : PRIMARY 3
SUBJECT : MATHEMATICS
TERM : 2025 WEIGHTED ASSESSMENT 2

Q1	408
Q2	16
Q3	Angle B
Q4	L
Q5	AB// EF
Q6	a) 3A b) 46
Q7	$48 \div 8 = 6$
Q8	$205 \times 9 = 1845$
Q9	$125 \div 5 = 25$
Q10	$46 \times 3 = 138$ $138 + 2 = 140$
Q11	$1263 + 200 = 1463$ $1463 + 1263 = 2726$
Q12	
Q13	a) $40 \times 2 = 80$ Ans: James b) $90 - 50 = 40$

Q14	a) $51 + 51 = \$102$ b) $102 \div 3 = \$34$
Q15	a) $3 = 5$ $1 = 0$ $3 + 1 = 4$ b) $24 \div 4 = 6$ $6 \times 5 = \$30$

www.sgexam.com