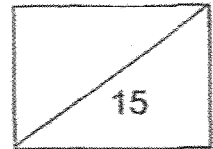


AI TONG SCHOOL
PRIMARY 3 SCIENCE
2025 TERM 2 REVIEW



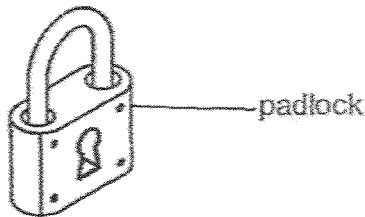
Name: _____ () Date: _____

Class: _____ Parent's signature: _____

Duration: 20 minutes

For questions 1 to 5, there are four options. One of them is the correct answer. Make your choice (1, 2, 3 or 4). Write your answer in the brackets.

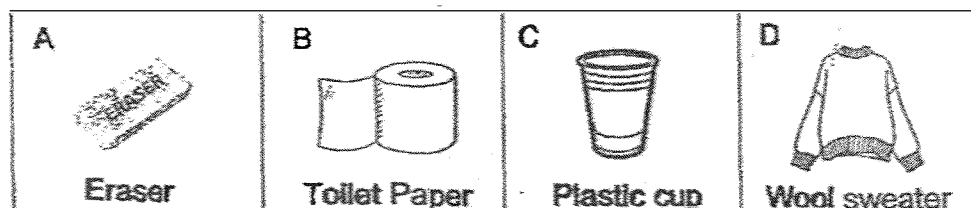
1. A padlock is made of metal because metal is _____.



- (1) strong
- (2) heavy
- (3) flexibly
- (4) waterproof

()

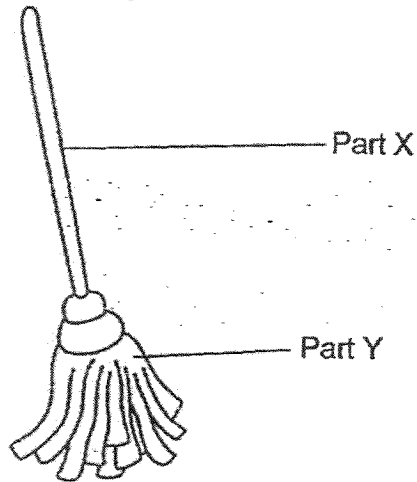
2. Which of the following objects are made from plants?



- (1) A and B only
- (2) B and D only
- (3) A, B and D only
- (4) A, B, C and D

()

3. Mr Tan is looking for materials to make a mop as shown below. He needs two types of materials to make parts X and Y.



Look at the table of some of the materials and their properties.

Property	Material			
	E	F	G	H
Is it flexible?	Yes	No	No	Yes
Is it able to absorb water?	Yes	No	No	Yes
Does it break easily?	No	Yes	No	Yes

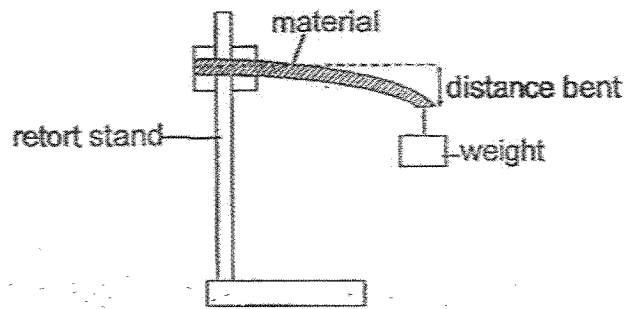
Which material above is most suitable to be used for part X and Y ?

	Part X	Part Y
(1)	E	G
(2)	F	H
(3)	G	E
(4)	H	F

()

(Go on to the next page)

4. Siti conducted an experiment to test the flexibility of four different materials, P, Q, R and S. The strips are of the same thickness and length.



The results are shown below.

Material	Distance bent (cm)
P	2
Q	5
R	7
S	4

Arrange the materials from the most flexible to the least flexible.

- (1) P, Q, R, S
- (2) P, S, Q, R
- (3) R, Q, S, P
- (4) R, S, Q, P


()

(Go on to the next page)

5. Three organisms, W, X and Y have characteristics as shown in the table below.

Characteristics	Organism		
	W	X	Y
Reproduce by spores		✓	
Have flowers	✓		
Can only be seen using a microscope			✓

Abby, Bala and Charles made the following statements.



Who is/are correct?

- (1) Abby only
- (2) Bala only
- (3) Abby and Charles only
- (4) Abby, Bala and Charles

()

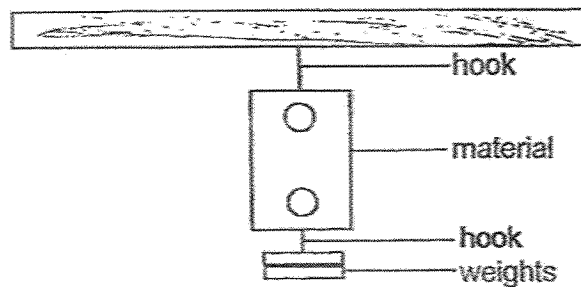
(Go on to the next page)

Section B (5 marks)

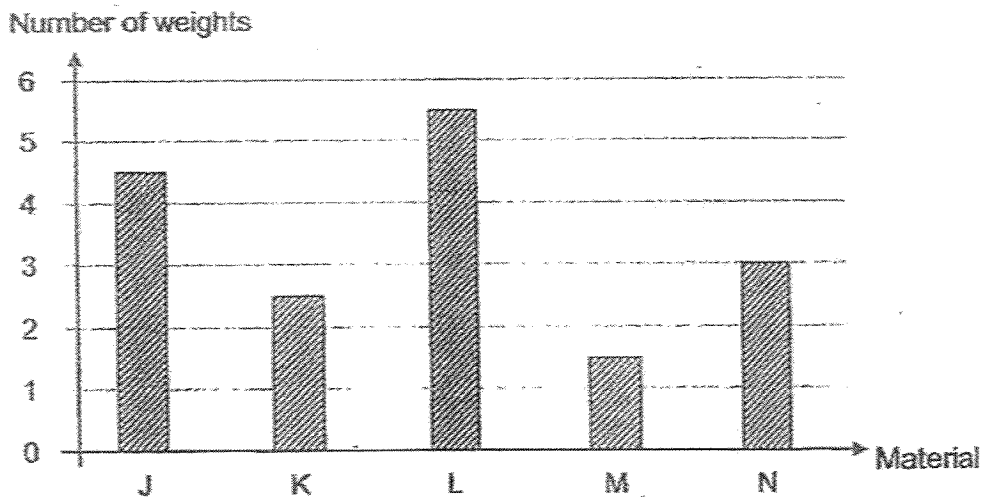
For questions 6 and 7, write your answers in the spaces provided.

The number of marks available is shown in bracket [] at the end of each question or part question.

6. Five pieces of materials were tested for their strength. Each piece of material was hung on a hook. Weights were added to the other hook hung from the material until the material broke.



The graph below shows the number of weights needed to break each material.



- (a) Which is the strongest material?


[1]

- (b) State the material(s) that is/are stronger and weaker than K.

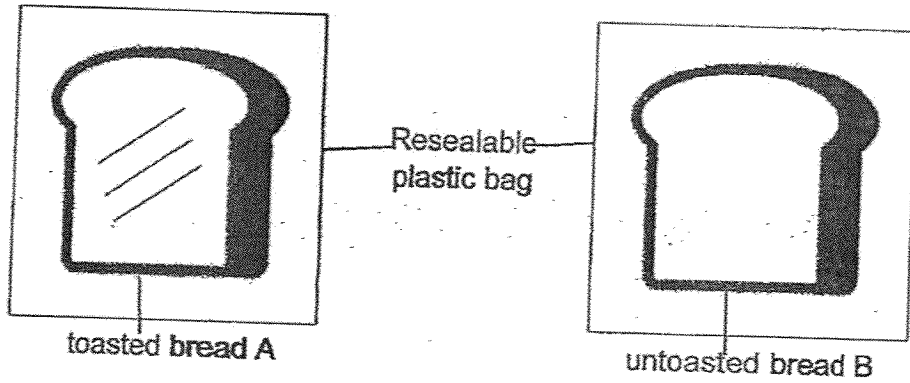
[2]

Stronger than K: _____

Weaker than K: _____

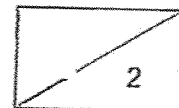


7. Darwin placed a slice of toasted bread A in a resealable plastic bag. He then placed another slice of untoasted bread B in a similar resealable plastic bag. He put both bags on the kitchen tabletop.



- (a) Compare the amount of mould on the two slices of bread A and B after 10 days. [1]

- (b) Explain your answer in (a). [1]



End of Paper

SCHOOL : AI TONG PRIMARY SCHOOL
LEVEL : PRIMARY 3
SUBJECT : SCIENCE
TERM : 2025 WEIGHTED ASSESSMENT 2

Q1	Q2	Q3	Q4	Q5					
1	1	3	3	3					

Q6(a)	L is the strongest material because it holds the most number of weights.
Q6(b)	Stronger than K : J, L, N Weaker than K : M
Q7(a)	Bread B will have more mould than Bread A after 10 days.
Q7(b)	There is less water in toasted bread. Mould needs water to grow.

www.sgexam.com

www.sgexam.com