

PAYA LEBAR METHODIST GIRLS' SCHOOL (PRIMARY)
PRIMARY 4 MATHEMATICS
2025 WEIGHTED ASSESSMENT 2

Name : _____ () Date : _____

Class : P4 _____ Marks : / 32

Parent's Signature: _____

Section A:

Questions 1 to 6 carry 2 marks each. For each question, four options are given. One of them is the correct answer. Make your choice (1, 2, 3 or 4). (12 marks)

1. Which number has the digit 3 in the thousands place?

(1) 37 942

(2) 54 039

(3) 69 382

(4) 73 648

()

2. Which of the following is not an equivalent fraction of $\frac{1}{4}$?

(1) $\frac{2}{8}$

(2) $\frac{3}{12}$

(3) $\frac{4}{12}$

(4) $\frac{5}{20}$

()

3. Which of the following decimals is the greatest?

- (1) 0.030
- (2) 0.42
- (3) 0.176
- (4) 0.234

()

4. At a carnival, every 6th participant receives a cup of drink and every 8th participant receives a key chain. Which is the first participant to receive both a cup of drink and a key chain?

- (1) 24th
- (2) 36th
- (3) 48th
- (4) 72nd

()


5. Arrange the following from the greatest to the smallest.

$1\frac{1}{9}$, $\frac{4}{5}$, $\frac{7}{6}$
--

- | | <u>Greatest</u> | | <u>Smallest</u> |
|-----|------------------|------------------|-----------------|
| (1) | $1\frac{1}{9}$, | $\frac{7}{6}$, | $\frac{4}{5}$ |
| (2) | $\frac{4}{5}$, | $\frac{7}{6}$, | $1\frac{1}{9}$ |
| (3) | $1\frac{1}{9}$, | $\frac{4}{5}$, | $\frac{7}{6}$ |
| (4) | $\frac{7}{6}$, | $1\frac{1}{9}$, | $\frac{4}{5}$ |

()

6. A shop sells bottled drinks at \$2.50 each.
Now, the shop is having a special offer for the bottled drinks.



Mrs Ho needs to buy 7 bottles of drinks.
What is the least amount of money she needs to pay?

- (1) \$15.30
- (2) \$16.10
- (3) \$16.30
- (4) \$17.50


()

Section B:

Questions 7 to 12 carry 2 marks each. Show your working clearly in the space below and write your answers in the spaces provided. For questions which require units, give your answers in the units stated. (12 marks)

Do not
write in this
space

7. Use all the digits below to form



(a) the largest 5-digit number

Ans: (a) _____

(b) the smallest 5-digit even number

Ans: (b) _____

8. What is the value of $\frac{5}{6} + \frac{2}{3}$?

Express your answer as a mixed number.

Ans: _____

9. What is the value of $4 \div 7$? Correct your answer to 1 decimal place.

Ans: _____

10. The table below shows the number of times Primary Four students in a school jogs in a week.

Number of times jogged in a week	1	2	3	4	5
Number of students	61	50	42	75	80

How many students jogged ~~more than 2 times~~ in a week?

Ans: _____

11. Tina baked some cookies.

She gave $\frac{3}{10}$ of the cookies to her neighbour and had 84 cookies left.

How many cookies did she give to her neighbour?

Ans: _____

12. $\frac{13}{25} = 0.5 + \boxed{?} \dots$

What is the missing decimal in the box?

Ans: _____

Section C:

Questions 13 to 14 carry 4 marks each. Show your working clearly in the space provided for each question and write your answers in the spaces provided.

Equations must be written. Marks will be awarded for correct methods and answers. (8 marks)

Do not write in this space

13. Joseph had 1378 marbles and Kumar had 1490 marbles

Kumar gave some marbles to Joseph
in the end Joseph had twice as many marbles as

(a) How many marbles did Kumar have in the end ?

Ans: (a) _____ [2]

(b) How many marbles did Kumar give Joseph?


Ans: (b) _____ [2]



14. Amy read $\frac{1}{4}$ of a book on Saturday, $\frac{1}{8}$ of the book on Sunday and the remaining pages on Monday. She read 72 fewer pages on Saturday than on Monday. How many pages were there in the book?

Do not
write in this
space

Ans: _____ [4]



End of Paper

SCHOOL : PAYA LEBAR MGS SCHOOL
LEVEL : PRIMARY 4
SUBJECT : MATHEMATICS
TERM : 2025 WEIGHTED ASSESSMENT 2

Q1	4
Q2	3
Q3	2
Q4	1
Q5	4
Q6	3
Q7	a) 75420 b) 20574
Q8	$1\frac{1}{2}$
Q9	0.6
Q10	$80 + 75 = 155$ $155 + 42 = 197$
Q11	$84 \div 7 = 12$ $12 \times 3 = 36$
Q12	0.02
Q13	a) $1490 + 1378 = 2868$ $2868 \div 3 = 956$ b) $1490 - 956 = 534$
Q14	$\frac{2}{8} + \frac{1}{8} = \frac{3}{8}$ $\frac{8}{8} - \frac{3}{8} = \frac{5}{8}$ $\frac{5}{8} - \frac{2}{8} = \frac{3}{8}$ $\frac{3}{8} \rightarrow 72$ $72 \div 3 = 24$ $24 \times 8 = 192$

www.sgexam.com