

RULANG PRIMARY SCHOOL

Mission: Fostering a culture of care, excellence and innovation to develop empathetic, resilient and creative citizens who will contribute to a better tomorrow.

Established since 1930 Vision: Scholars of Tomorrow

Name _____ ()

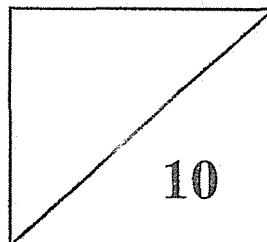
Level : Primary 5

Class : Primary 5 _____

Date : 27 February 2025

MINI-TEST 1 2025 MATHEMATICS

PAPER 1



TOTAL TIME FOR PAPER 1: 15 minutes

6 questions

10 marks

- DO NOT OPEN THIS BOOKLET UNTIL YOU ARE TOLD TO DO SO.
- READ ALL THE INSTRUCTIONS CAREFULLY.
- ANSWER ALL THE QUESTIONS.
- THE USE OF CALCULATORS IS NOT ALLOWED.

Questions 1 and 2 carry 1 mark each. Question 3 carries 2 marks. For each question, four options are given. One of them is the correct answer. Make your choice (1, 2, 3 or 4) and shade your answer on the Optical Answer Sheet. (4 marks)

1. In 813 465, the value of the digit 8 is _____.
- (1) 800
 - (2) 8000
 - (3) 80 000
 - (4) 800 000
2. Express $\frac{22}{3}$ as a decimal. Give your answer correct to 1 decimal place.
- (1) 7.0
 - (2) 7.3
 - (3) 7.4
 - (4) 8.0
3. Ali gave 15 marbles to each of his 36 classmates. He had 16 marbles left. How many marbles did he have at first?
- (1) 524
 - (2) 540
 - (3) 556
 - (4) 591

Questions 4 to 6 carry 2 marks each. Show your working clearly and write your answers in the spaces provided. For questions which require units, give your answers in the units stated. (6 marks)

4. $39\,458 = 38 \text{ thousands} + \boxed{\quad ? \quad} + 45 \text{ tens}.$
What is the missing number in the box above?

Ans: _____

5. There is an equal number of students in Hall C and Hall D. When 50 students move from Hall C to Hall D, there will be 500 students in Hall C. How many students are in both the halls altogether?

Ans: _____

6. Find the value of $8 \times (10 + 2 \times 3) \div 2.$

Ans: _____

End of Paper 1



RULANG PRIMARY SCHOOL

Mission: Fostering a culture of care, excellence and innovation to develop empathetic, resilient and creative citizens who will contribute to a better tomorrow.
Vision: Scholars of Tomorrow

Established since 1930

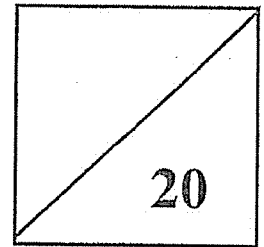
Name _____ ()

Level : Primary 5

Class : Primary 5 _____

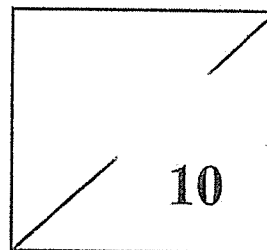
Date : 27 February 2025

Total Marks
Papers 1 & 2



MINI-TEST 1 2025 MATHEMATICS

PAPER 2



TOTAL TIME FOR PAPER 2: 20 minutes
3 questions
10 marks

- DO NOT OPEN THIS BOOKLET UNTIL YOU ARE TOLD TO DO SO.
- READ ALL THE INSTRUCTIONS CAREFULLY.
- ANSWER ALL THE QUESTIONS.
- THE USE OF AN APPROVED CALCULATOR IS ALLOWED.

For questions 1 to 3, show your working clearly and write your answers in the spaces provided. The number of marks available is shown in the brackets [] at the end of each question or part-question.
(10 marks)

1. Peter, Mary and John shared some marbles among themselves.
Peter received 4 more marbles than Mary.
John received twice as many marbles as Peter. [2 marks]

Each statement below is either true, false or not possible to tell from the information given. For each statement, put a tick (\checkmark) in the correct column.

Statement	True	False	Not possible to tell
John had 8 more marbles than Mary.			
John had 4 more marbles than Peter.			
The children had a total of 16 marbles.			

2. Mr Lee is 43 years old. His son, Tom, is 7 years old.

(a) How much older is Mr Lee than his son?

Ans: (a) _____ [1]

(b) In how many years' time will Mr Lee be 4 times as old as his son?

Ans: (b) _____ [3]

3. Read the problem. Look at the numbers in the box.
Put the numbers in the blanks where you think they fit best.
Each number can be used only once.
Read the problem again. Do the numbers make sense?

[4 marks]

_____ of the colour pencils in a box are red. _____ of the colour pencils are
(a) (b)
yellow and the rest are green. There are _____ colour pencils in the box. There are
(c)
_____ more red colour pencils than green colour pencils.
(d)

$\frac{1}{2}$,	$\frac{1}{3}$,	40	,	120
---------------	---	---------------	---	----	---	-----

www.sgexam.com

SCHOOL : RULANG PRIMARY SCHOOL
LEVEL : PRIMARY 5
SUBJECT : MATHEMATICS
TERM : 2025 MINI TEST 1

Paper 1

Q1)	4
Q2)	2
Q3)	3
Q4)	1008
Q5)	500 + 50 = 550 550 + 550 = 1100
Q6)	64

Paper 2

Q1)	False False Not possible to tell
Q2)	a) $43 - 7 = 36$ b) $36 \div 3 = 12$ $12 - 7 = 5$
Q3)	a) $\frac{1}{2}$ b) $\frac{1}{3}$ c) 120 d) 40

www.sgexam.com